

Name:

Show all work. No calculators.

Time:

1. Evaluate the following expression if $x = 3$ and $y = 4$.

$$x^2y - y^3 + x^{1/2}$$

2. Simplify:

$$\frac{-2 - 2(1 - 5)}{-2 - 3}$$

3. Simplify and write the answer with all variables in the numerator.


$$\frac{(xm^{-1})^{-3} x^2 m^2}{(x^0 y^2)^{-2} xy}$$

4. Solve for x:

$$3\left(\frac{5}{6} - \frac{5}{3}x\right) = -\left(-\frac{1}{2} + x\right)$$

5. The total value of the pennies and nickels was \$14.50. Hannah counted the coins and found there were 450 coins in all. How many of each type of coin did she have?

6. Graph $y = 3x + 5$. Determine the slope of the line and its y-intercept.

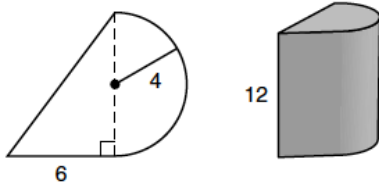


Name:

Show all work. No calculators.

Page 2

7. (a) Find the perimeter of the figure shown on the left below. Dimensions are in meters. (b) Find the area of the figure. (c) The figure shown is the base of a geometric solid whose sides are perpendicular to the base and whose height is 12 meters. A depiction of the solid is shown on the right. Find its volume. Leave π as π .



8. The scores that Frank achieved on his five tests were 90, 70, 70, 85, and 95. Find the range, mean, median, and mode of the five test scores.

9. Twice a number is decreased by 7, and this quantity is multiplied by 3. The result is 9 less than 10 times the number. What is the number?

10. Solve by factoring:

$$x^2 - 15 = 2x$$

11. Ramses cogitated. He thought of three consecutive even integers and found that 3 times the sum of the first two was 58 less than 14 times the opposite of the third. What were his integers?

12. Simplify.

$$\frac{0.000030 \times 10^{-18}}{(5000 \times 10^{-14})(300 \times 10^5)}$$

13. Solve.

$$-3^0 [(-3^2 + 4)(-2^2 - 2) - (-2) + 4] - \sqrt[3]{-8}$$

14. Indicate whether the following numbers are rational numbers or irrational numbers.

(a) $0.\overline{3}$

(b) $\frac{\pi}{100}$

(c) $\sqrt{9-4}$

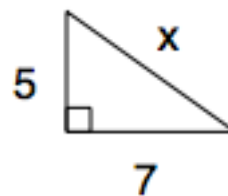
(d) $\frac{25}{7}$

15. Evaluate if $a = 2$, $b = 5$, and $c = 2$.

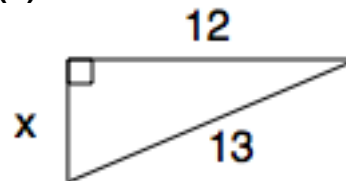
$$\frac{-b \pm \sqrt{b^2 - 4ac}}{2a}$$

16. Use the Pythagorean theorem to find x .

(a)



(b)

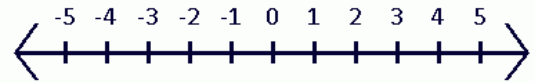


17. Find z.

$$\frac{p}{m} - \frac{x}{z} + a = k$$

18. Graph:

$$|x| > 2$$



19. There were 52 bricks and some were red and some were white. The red bricks numbered 16 more than twice the number of white bricks. How many bricks of each color were there?

20. Factor by grouping.

$$6ax + 7am^3 + 12d^3x + 14m^3d^3$$

FreedomProject Academy
Algebra II Math Placement Test
Print, Complete Showing ALL
Work (No Calculators), Scan, &
Email to tests@fpeusa.org

