
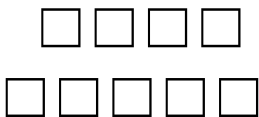






Name:

Show All work. No calculators.

Time it took to take test:

Count the number of shapes for problems 1 to 6.

1.  <hr/>	2.  <hr/>	3.  <hr/>
4.  <hr/>	5.  <hr/>	6.  <hr/>
7-8. Find the missing numbers. (3, 4, 5, _____, _____, _____) (10, 9, 8, _____, _____, _____)		9. $\begin{array}{r} 4 \\ + 2 \\ \hline \end{array}$
10. $\begin{array}{r} 8 \\ + 1 \\ \hline \end{array}$	11. $\begin{array}{r} 3 \\ + 5 \\ \hline \end{array}$	12. $\begin{array}{r} 0 \\ + 7 \\ \hline \end{array}$

Name:

Show all work. No calculators.

Page 2

13.

$$\begin{array}{r} 4 \\ - 1 \\ \hline \end{array}$$

14.

$$\begin{array}{r} 5 \\ - 2 \\ \hline \end{array}$$



15.

$$\begin{array}{r} 2 \\ - 0 \\ \hline \end{array}$$

16.

$$\begin{array}{r} 3 \\ - 3 \\ \hline \end{array}$$



17. Draw a line around the circle. 18. Put an X on the triangle.



19. Which choice has 1 more than the number of apples shown above?

20. Which choice has 1 less than the number of apples shown above?

21. Which choice has the same number of apples shown above?



1ST GRADE WRITING SAMPLE

Students should complete the following writing prompt, and add one more sentence to explain their choice in their best handwriting. Students should complete all writing on their own with no assistance from anyone.



illustrations of.com #1090352

If I could be an animal, I would be...
